

Name Answer Key

Degree program (circle one):

Date _____

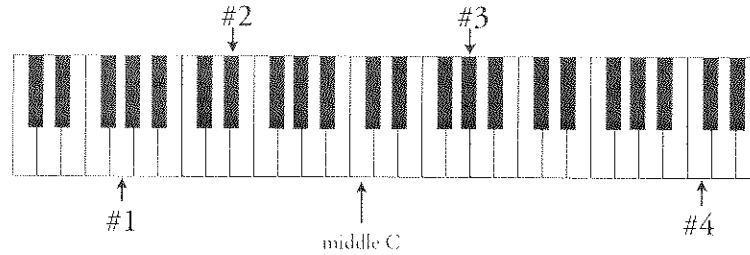
BM BME BA Music Minor Pre-Music

Voice / Specific Instrument _____

Bear Number (if known) _____

UNC Sample Theory Placement Test

I. Notation. Write these notes in the correct octave on the given staff.



#1 #2 #3 #4

Correctly rewrite these rhythms. Beam as necessary.

II. Intervals. Write these intervals.


Maj 6↑ Perf 4↑ Aug 2↓ min 3↑ Perf 5↓ Maj 2↓

III. Triads. Write these chords.

F major G \flat major B \flat minor E \flat dim C \sharp minor E aug

IV. Scales. Write these scales.

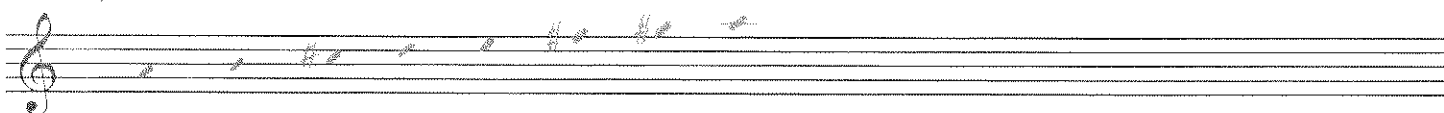
G major




D pure (natural) minor




A major




B melodic minor



F harmonic minor



Eb major



V. Key Signatures. Write these key signatures.



E major

G# minor

C minor

Bb major

D# minor

A major